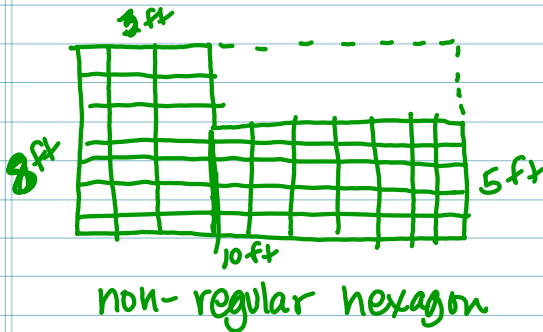


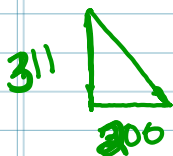
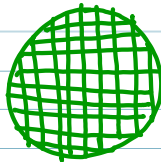
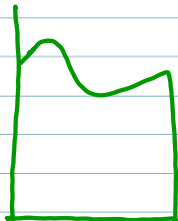
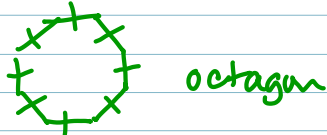
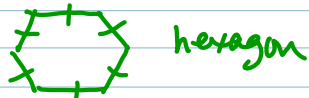




4/6

* Math Quiz #19 p696

Lab p713-716



regular polygon -
 all angles and
 all sides
 congruent.



~~62,200~~

~~31,100~~


62,200

31,100

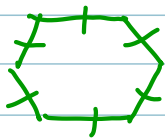
4/6

* Math Quiz #19 p696

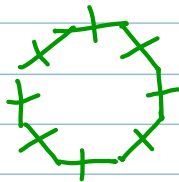
Lab p713-716



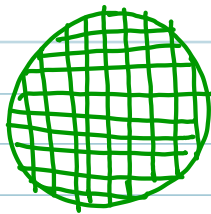
non-regular hexagon




hexagon




octagon




regular polygon -
all angles and
all sides
congruent.



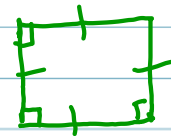
rhombus



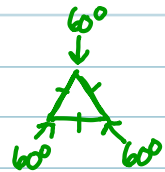
parallelogram



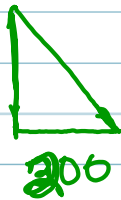
rectangle



square



311



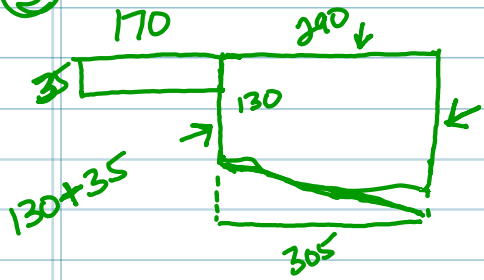
~~62,200~~

~~2,200~~
~~21,100~~

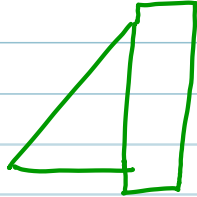
62,200

31,100

③



⑤



p 715 # 3-5
pick 8 or
pick 10.
p. 716 pick either 11, 12, 13