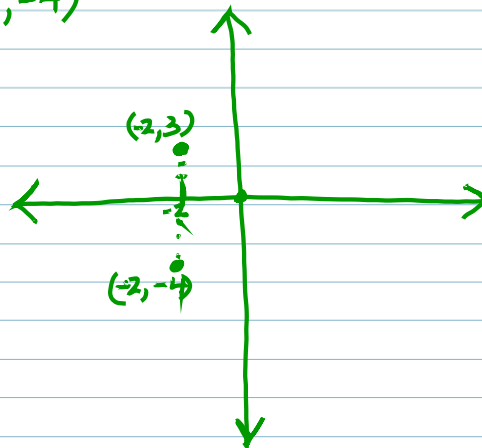


2/5

p. 412
step 1

A) (-2, 3)
B) (-2, -4)



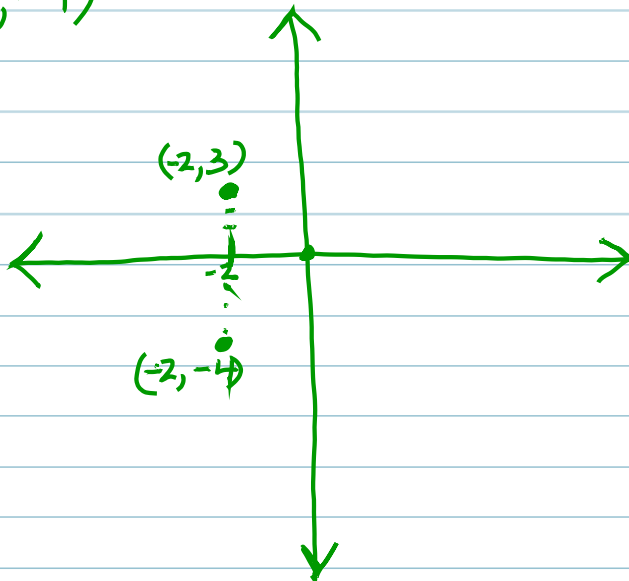
A	3	dist from x
B	-4	3
		4

$$\begin{aligned} |3| &= 3 \\ + \\ |-4| &= 4 \\ \hline &7 \end{aligned}$$

2/5

p 412
step 1

- A) (-2, 3)
- B) (-2, -4)



A	3	dist from x
B	-4	

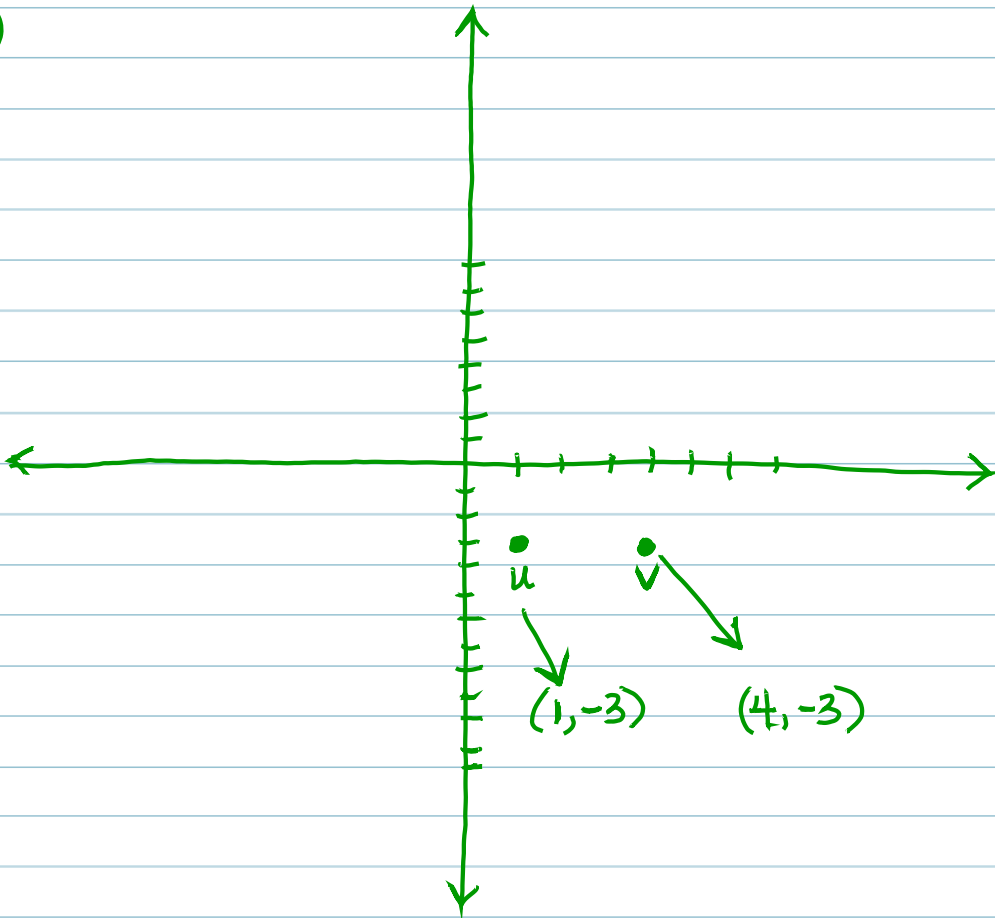
$$|3| = 3$$

$$|-4| = 4$$

7

PG 412

①



X
dist 1
4

to compare distance
use the X or Y
that different, not
the same...

⊗ comparing X →
to do that look at
distance from Y axis.

p413

HW p412-414 (all)